

## CHAPTER 2: The respiratory system

### Practice questions - text book pages 38 - 40

- 1) When the inspiratory muscles contract, which one of the following statements is true?
- the size of the thoracic cavity increases in diameter.
  - the size of the thoracic cavity increases in length.
  - the volume of the thoracic cavity decreases.
  - the size of the thoracic cavity increases in both length and diameter.

**Answer:** d.

**Explanation:**

- This must be d. due to the contraction of the intercostals muscles and diaphragm.

- 2) Which one of the following determines the direction of gas movement?
- solubility in water.
  - partial pressure gradient.
  - temperature.
  - pH.

**Answer:** b.

**Explanation:**

- The answer must be the partial pressure gradient as this is the pressure exerted by a single component of a mixture of gases.
- Within the human body gases such as  $O_2$  and  $CO_2$  move from high concentrations to lower concentrations due to the differences in partial pressure of these gases.

- 3) Which one of the following has the greatest stimulating effect on the respiratory centres in the brain?
- oxygen.
  - carbon dioxide.
  - calcium.
  - willpower.

**Answer:** b.

**Explanation:**

- Answer b. because as  $pCO_2$  increases,  $CO_2$  accumulates in the brain and forms carbonic acid which then dissociates freeing the hydrogen ion ( $H^+$ ).
- The increase in  $H^+$  excites the central chemoreceptors and results in increase in depth and rate of breathing.

- 4) The maximum amount of air that can be expired after a maximum inspiration is called the:
- tidal volume (TV).
  - expiratory reserve volume (ERV).
  - vital capacity (VC)
  - minute ventilation ( $\dot{V}E$ ).

**Answer:** c.

**Explanation:**

- Must be the vital capacity which is the sum of tidal volume, expiratory reserve volume (ERV) and inspiratory reserve volume (IRV).

- 5) During exercise, which one of the following statements is true?
- the arterial percent oxyhaemoglobin saturation is decreased.
  - the venous percent oxyhaemoglobin saturation is decreased.
  - the arterial  $pCO_2$  is measurably increased.
  - the arterial pH is measurably decreased.

**Answer:** b.

**Explanation:**

- This is because some of the oxygen has been off loaded from the haemoglobin within the capillary bed.

- 6) Describe the structures involved in gaseous exchange in the lungs and explain how gaseous exchange occurs within this tissue.

6 marks

**Answer:**

- Gaseous exchange is the delivery of **oxygen** from the lungs to the bloodstream.
- And the elimination of **carbon dioxide** from the bloodstream to the lungs.
- It occurs in the lungs between the alveoli and a network of tiny blood vessels called capillaries, which are located in the walls of the alveoli.

*How gaseous exchange occurs within this tissue:*

- Gaseous exchange depends on the **partial pressure** of each gas, gas solubility and temperature.
- Via a process called **diffusion**.
- Gas molecules diffuse into the lungs and tissues down **concentration gradients** from higher concentration (high pressure) to lower concentrations (lower pressure) or results of differences in gas partial pressures.
- Hence, oxygen diffuses through the **alveoli walls** into the surrounding pulmonary **capillaries**.
- And carbon dioxide diffuses across in the **opposite direction** into the lungs.
- Because **venous blood** contains oxygen at lower pressure and carbon dioxide at higher pressure than alveolar gas.

- 7) Describe the effects of exercise on the arterio-venous oxygen difference ( $a-\bar{v}O_{2\text{diff}}$ ).

4 marks

**Answer:**

- The value of  $a-\bar{v}O_{2\text{diff}}$  represents the extent to which oxygen has been removed from the blood as it passes through the body.
- This means that, at **rest**, about 75% of the blood's original oxygen load (15 ml per 100 ml of blood out of the original 20 ml) remains bonded to the haemoglobin.
- This is called the **oxygen reserve**, which is immediately available for exercise when it begins.
- During **exercise** the  $a-\bar{v}O_{2\text{diff}}$  value triples leaving only 25% of the blood's original oxygen load (now it is 5 ml per 100 ml of blood out of the original 20 ml) bonded to the haemoglobin.

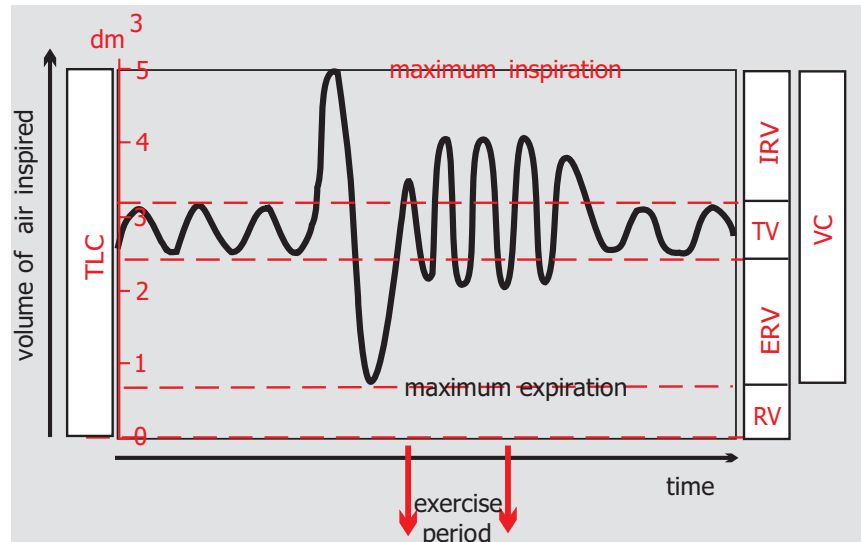
- 8) a) The diagram in figure 2.16 represents the lung volume changes based on a number of spirometer readings during various breathing actions. With reference to the trace, briefly explain resting tidal volume (TV), expiratory reserve volume (ERV), vital capacity (VC), and residual volume (RV). 4 marks

**Answer:**

**Definitions:**

- **Resting tidal volume** is that volume of air that is breathed in **or** out during one breath at rest.
- **Expiratory reserve volume** is that volume of air that can be forcibly expired over and above resting tidal volume.
- **Vital capacity** is the maximal volume of air that can be forcibly expired after maximal inspiration in one breath.
- **Residual volume** is that volume of air remaining in the lungs after maximal expiration.

**figure 2.16 – spirometer trace**



- b) Using the information in the spirometer trace, state what happens to the following volumes during the exercise period: residual volume (RV), inspiratory reserve volume (IRV), and expiratory reserve volume (ERV). 3 marks

**Answer:**

- Residual volume remains the same.
- IRV decreases.
- ERV decreases

- c) Why does tidal volume change by only a small amount during the exercise period? 3 marks

**Answer:**

- Major respiratory regulator is **carbon dioxide**.
- Which controls rate of breathing (**f**).
- And depth (**TV**) of breathing.
- Effect of exercise is to increase  $p\text{CO}_2$ .
- And stimulate a bigger increase in breathing rate when compared with tidal volume.
- So that the increased levels of  $\text{CO}_2$  are removed quickly from the body.

- 9) A student measured the volume of air that he or she ventilated at rest and during submaximal exercise. The results are shown in table 2.4.

Table 2.4 – ventilation at rest and during submaximal exercise

activity level	inhalation volume (TV)	breathing rate (f)	minute ventilation volume ( $\dot{V}_E$ )
at rest	500 ml	one every 6 seconds	A
submaximal exercise	800 ml	one every 2 seconds	B

Define what is meant by the term ‘minute ventilation volume’ and calculate the values for A and B, clearly showing the method used.

4 marks

Answer:

- **Minute ventilation** volume is the volume of air inspired **or** expired in one minute - notated as  $\dot{V}_E$ .
- It is a combination of tidal or inhalation volume (TV) and breathing rate (f).  

$$\dot{V}_E = TV \text{ (inhalation volume)} \times f \text{ (breathing rate).}$$
- **At rest:**  

$$\dot{V}_E = 500 \times 10.$$

$$= 5,000 \text{ ml min}^{-1} \text{ or } 5 \text{ dm}^3 \text{ min}^{-1} \text{ or } 5 \text{ litres min}^{-1}.$$
- **During submaximal exercise:**  

$$\dot{V}_E = 800 \times 30.$$

$$= 24,000 \text{ ml min}^{-1} \text{ or } 24 \text{ dm}^3 \text{ min}^{-1} \text{ or } 24 \text{ litres min}^{-1}.$$

- 10) The binding of oxygen to haemoglobin depends on  $pO_2$  in the blood and the affinity of haemoglobin with oxygen. The curves in figure 2.17 show how different concentrations of carbon dioxide affect the saturation of haemoglobin at varying partial pressures of oxygen.

- a) Explain what is meant by partial pressure of oxygen ( $pO_2$ ).  
1 mark

Answer:

- The pressure that oxygen ( $pO_2$ ) exerts within a mixture of gases.
- b) What are the values of percentage saturation of haemoglobin on the three curves when the partial pressure of oxygen is 5.0 kPa? 3 marks

Answer:

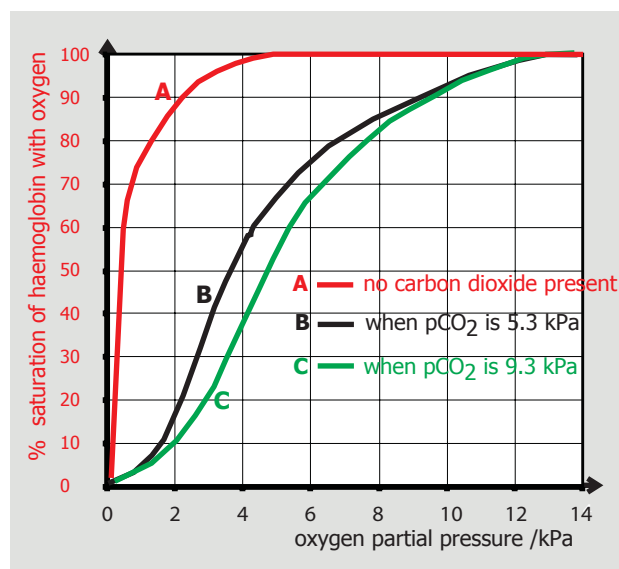
- Curve **A** - haemoglobin is fully saturated with oxygen – 100%.
- Curve **B** - haemoglobin is 68% saturated with oxygen.
- Curve **C** – haemoglobin is 55% saturated with oxygen.

- c) What are the implications of the carbon dioxide values for curves B and C for an athlete? 2 marks

Answer:

- **The greater  $pCO_2$  the less % of  $HbO_2$  saturation.**
- This is because as more energy is released by respiring muscle cells.
- More  $CO_2$  is produced as a waste product.
- Diffusing across into the blood capillaries.
- Therefore the more  $CO_2$  in the blood and surrounding the red blood cells (and hence the haemoglobin in the red blood cells), the less oxygen can be carried by the haemoglobin.
- This means that the difference (in the case of curve B at 5.0 kPa – this is  $100 - 68 = 32\%$  of the oxygen carried).
- Detaches itself from the haemoglobin and diffuses into the muscle cells where it is available for respiration.
- When more  $CO_2$  is present (during violent exercise) as in the case of curve C at  $pCO_2 = 9.3 \text{ kPa}$ , at the same  $pO_2 (5.0 \text{ kPa})$  haemoglobin releases  $100 - 55 = 45\%$  of the oxygen carried.
- So the more exercise, the more oxygen released and made available for more exercise.

figure 2.17 – oxyhaemoglobin dissociation curve



10) continued

d) Why is the partial pressure of oxygen ( $pO_2$ ) important to the process of gaseous exchange?

3 marks

**Answer:**

- The increased loading of  $CO_2$  causes more unloading of  $O_2$  from haemoglobin,
- And so more  $O_2$  is released for tissue cell respiration to sustain the physical activity undertaken.

*Importance of  $pO_2$  in gaseous exchange in the alveoli:*

- The  $pO_2$  in the lung *alveoli* must be *higher* than the  $pO_2$  in the pulmonary *blood*.
- In order for oxygen to *diffuse* into the bloodstream.

*Importance of  $pO_2$  in gaseous exchange at tissue cell sites:*

- Similarly, the *arterial  $pO_2$*  must be *greater* at the tissue site than in the tissue cells.
- In order for oxygen to *diffuse* into tissue cells.

11) A hockey player has a match in one hour's time.

Describe how inspiration occurs during this resting period.

During the hockey match, the player must increase the volume of gas exchanged in the lungs and muscles.

Explain the changes in the mechanics of breathing (inspiration and expiration) which facilitate this increase.

8 marks

**Answer:**

*Inspiration at rest:*

- *External intercostal muscles* and *diaphragm contract*.
- *Internal intercostal muscles relax*.
- The *action* of these contracting muscles is to *increase the volume* of the thoracic cavity.
- As *pleural and pulmonary pressures are reduced* (air pressure within the lungs is reduced as their volume expands).
- *Air in the lungs is at lower pressure than the air in the atmosphere outside*.
- *Since air moves from areas of high pressure to areas of low pressure*.
- *Air rushes into the lungs*.

*Changes to inspiration during exercise period:*

- *Additional respiratory muscles contract*.
- Namely *sternocleidomastoid, scalenes and pectoralis minor*.
- Effect is that the *diaphragm contracts and flattens* (moves downward away from the lungs) with more force.
- *Increased lifting of sternum*.
- Which gives *increased thoracic cavity volume*.
- *Decreased pleural and pulmonary pressures (within the lungs)*.
- *Lower pulmonary air pressure*.
- *So the pressure of air outside is still bigger than inside*.
- *More air rushes into the lungs*.

*During expiration during exercise period:*

- *Active respiratory muscles contract*.
- Namely *internal intercostal and rectus abdominus*.
- *The diaphragm relaxes and domes upward thereby compressing the lungs*.
- *The ribs and sternum are pulled in and down with more force*.
- This *decreases* the size of the *thoracic cavity volume*.
- *Gives increased pleural and pulmonary pressures (the pressure of the air inside the lungs is increased)*.
- *So the air inside the lungs is at a higher pressure than the atmospheric air outside*.
- *More air is forced out of the lungs*.

12) **A level.** Describe the effect of exercise on  $pO_2$ ,  $pCO_2$  and pH and explain how ventilation might be increased during exercise.

15 marks

**Answer:**

- $pO_2$  and  $pCO_2$  represent the partial pressure of oxygen and carbon dioxide respectively.
- pH is a measure of acid or alkaline.
- See graphs in figures Q2.1 and Q2.2.

6 marks for 6 of:

**Effects of exercise on  $pO_2$ ,  $pCO_2$  and pH:**

- These two graphs illustrate how oxygen is released from oxyhaemoglobin from rest to exercise.
- The maximum possible haemoglobin  $pO_2$  is 13.3kPa.
- At rest pH is fairly neutral at 7.6, and  $pCO_2$  is 5.6.
- Increasing physical activity results in increased  $CO_2$  or decreased pH.
- Causing a shift on the  $O_2$  dissociation curve to the right.
- So that the percentage of saturated haemoglobin with oxygen is reduced.
- This is called the 'Böhr effect'.
- The Böhr effect becomes particularly important during physical activity because increased metabolic heat and acidity in active tissues augments oxygen release, as illustrated when pH decreases to 7.2.
- $a-\bar{v}O_{2diff}$  describes the difference in oxygen content between arterial and mixed-venous blood.
- During exercise tissue  $pO_2$  decreases.
- This forces Hb to release greater quantities of oxygen to meet metabolic needs.
- This expands the tissue  $a-\bar{v}O_{2diff}$  difference.
- And so more oxygen is released from the haemoglobin for active tissue cell respiration.

6 marks for 6 of:

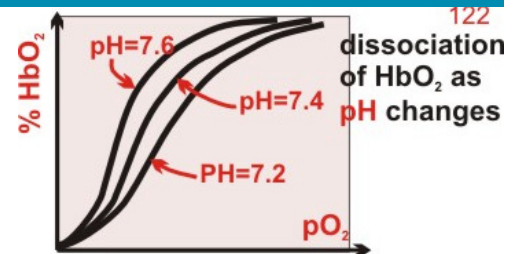
**How ventilation might be increased during exercise:**

- Pulmonary ventilation increases linearly with oxygen uptake during light and moderate exercise.
- Towards maximal exercise, pulmonary ventilation, (expressed here as minute ventilation ( $\dot{V}E$ ) – volume of air inspired or expired in one minute) increases disproportionately with increases in oxygen uptake.

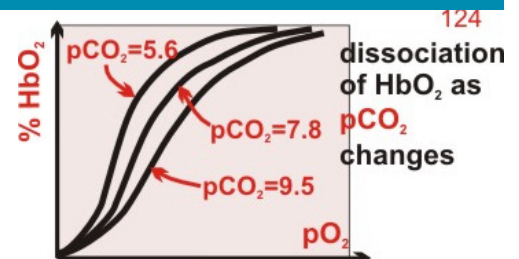
**How does this happen?**

- Increase in ventilation is achieved by increasing the tidal volume or the volume of air inspired or expired in one breath (TV).
- And the frequency of breathing (f) or the number of breaths taken in one minute.
- Expressed as  $\dot{V}E = TV \times f$ .
- Changes in TV and f increase minute ventilation.
- During submaximal exercise tidal volume increases substantially.
- With an associated lesser increase in the number of breaths.
- Towards maximal exercise, tidal volume decreases slightly from submaximal values.
- Breath frequency increases dramatically.
- Thereby increasing pulmonary ventilation to meet exercise needs.

**figure Q2.1 – oxyhaemoglobin dissociation curve showing changes with pH - acidity**



**figure Q2.2 – oxyhaemoglobin dissociation curve showing changes with CO<sub>2</sub> partial pressure**



13) Smoking is responsible for diseases such as emphysema. Describe the impact of emphysema on the respiratory system.

3 marks

**Answer**

- Smoking scars inner lining of arteries.
- Producing a plaque (rigid layer) that **clogs** the blood vessel.
- Thereby reducing vessel elasticity, blood flow and oxygen transport.
- One of the toxic gases in cigarette smoking is **carbon monoxide**.
- This gas binds to the haemoglobin sites (the oxygen-carrying component in red blood cells).
- Resulting in a much reduced oxygen uptake and therefore oxygen carrying capacity.